

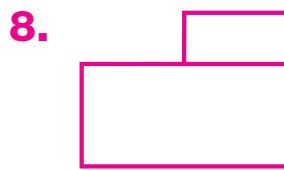
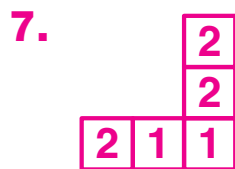

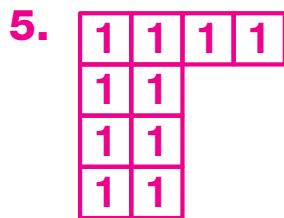



Answers for Lesson 8-2, pp. 360–361 Exercises

1. isometric view

2. 8


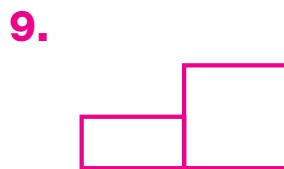
3. rectangle



Top view

Front view


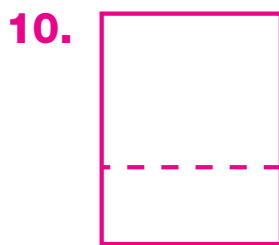
Right view



Top view

Front view

Right view



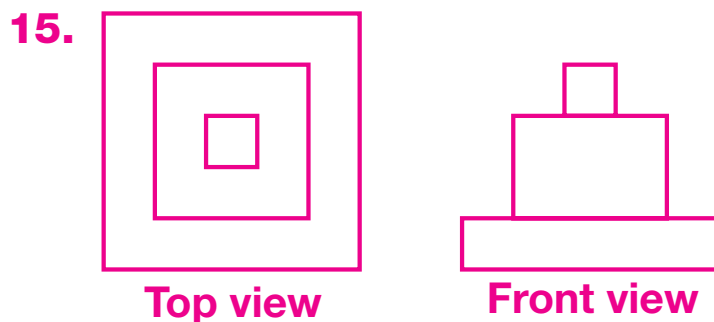
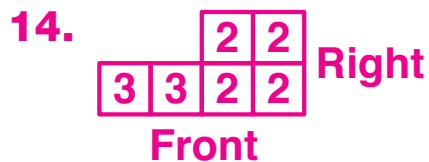
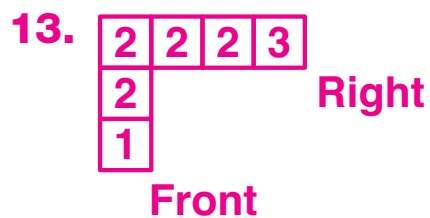
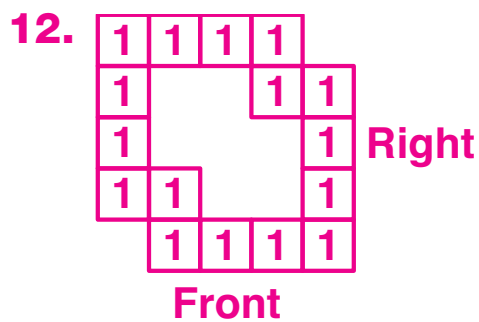
Top view

Front view

Right view

11. Check students' work.

Answers for Lesson 8-2, pp. 360–361 Exercises (cont.)



16. A plane that cuts parallel to the bases will make a circle. A plane that cuts perpendicular to the bases will make a rectangle.

17. cone

18. cylinder

19. 6, 8; 6, 8, 10

20. A

21. F

22. 128.7 m²

23. 11.9 in.²

24. 21,904.0 cm²